




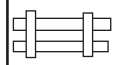
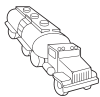



Name \_\_\_\_\_

# Find Your Way on the Farm

Study the map grid of the farm. Use the grid to complete the questions below.

	1	2	3	4	5	6	7		
A								Farm Road	
B								Pear Tree Lane	
C								Market Street	
D	1st Street	2nd Street	3rd Street		4th Street	5th Street	6th Street	7th Street	Tractor Trail
									Crop Avenue

Key:  fence  tractor  cow  wheat field  milk truck  barn and silo  tree  horse

1. An intersection is the place where two streets come together. Complete the sentences below by writing the names of the two streets that make the intersections where the objects in bold print are located.

- The **tree** is located at \_\_\_\_\_ and \_\_\_\_\_.
- The **wheat field** is located at \_\_\_\_\_ and \_\_\_\_\_.
- The **horse** is located at \_\_\_\_\_ and \_\_\_\_\_.
- The **tractor** is located at \_\_\_\_\_ and \_\_\_\_\_.
- The **cow** is located at \_\_\_\_\_ and \_\_\_\_\_.

2. Give the letter and number of the box where each item is found on the map grid.

- tree \_\_\_\_\_
- barn and silo \_\_\_\_\_
- tractor \_\_\_\_\_
- wheat field \_\_\_\_\_
- pond \_\_\_\_\_
- fence \_\_\_\_\_
- milk truck \_\_\_\_\_
- cow \_\_\_\_\_

3. Add a farm object to the map grid. Draw the symbol, then write its coordinates below.